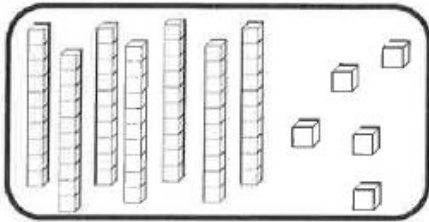


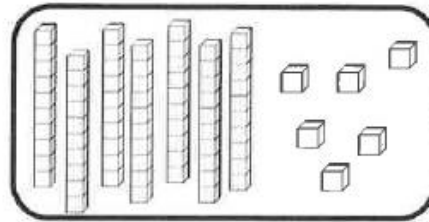


Nombres et quantités : de 0 à 80

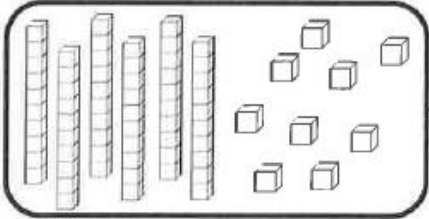
1 Complète avec le bon nombre :



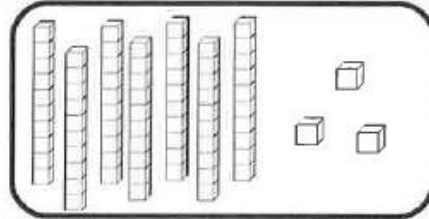
75



76

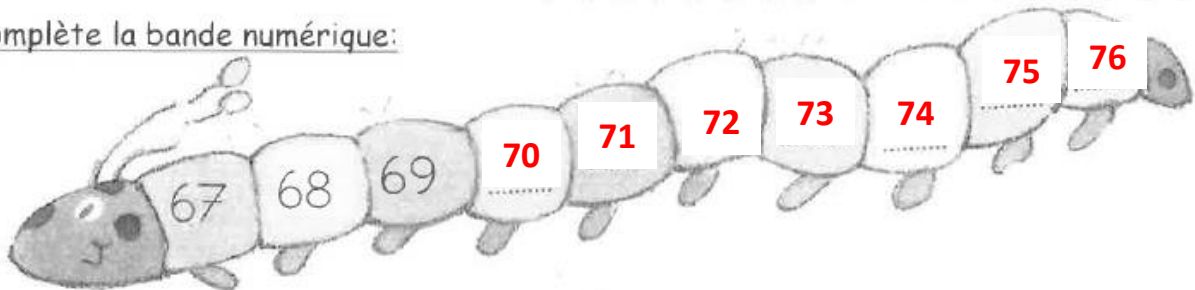


69



73

2 Complète la bande numérique:

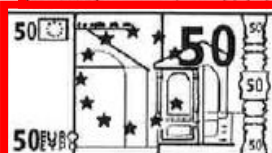
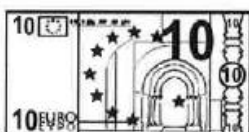



Nombres et quantités : de 0 à 80

1 Complète les cases grises du tableau des nombres

	31			34			37	
40		42				46		49
		52				56		
60			63		65			68
	71						77	79

2 Colorie les pièces et billets correspondants à la somme dans la tirelire :



Calcul mental

$$4 + 6 = 10$$

$$4 + 0 = 4$$

$$4 + 8 = 12$$

$$4 + 4 = 8$$

$$4 + 7 = 11$$

$$4 + 10 = 14$$

$$4 + 1 = 5$$

$$4 + 5 = 9$$

$$4 + 3 = 7$$

$$4 + 9 = 13$$

$$4 + 2 = 6$$