
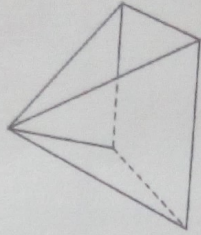
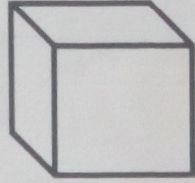
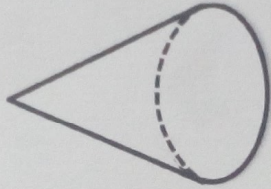
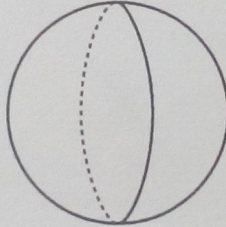
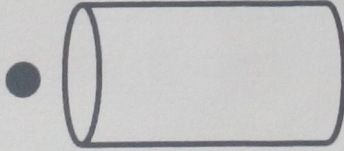



Géométrie

Fiche 2

Les solides

1 Je relie chaque objet à son solide.



2 Je relie chaque solide à son nom.

cube

cylindre

cône

sphère

pyramide

paré

