

Jeudi 19 mars (calcul mental)

$1 + 10 = 11$

$2 + 0 = 2$

$2 + 10 = 12$

$1 + 1 = 2$

$1 + 0 = 1$

$2 + 1 = 3$

$1 + 3 = 4$

$2 + 3 = 5$

$1 + 9 = 10$

$1 + 8 = 9$

$2 + 9 = 11$

$1 + 4 = 5$

$2 + 8 = 10$

$2 + 4 = 6$

$1 + 7 = 8$

$1 + 3 = 4$

$2 + 7 = 9$

$2 + 6 = 8$

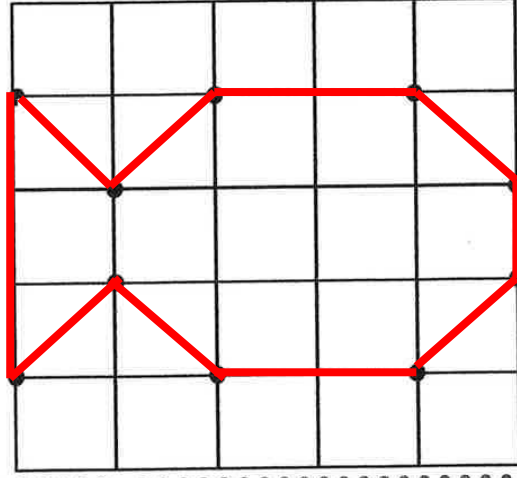
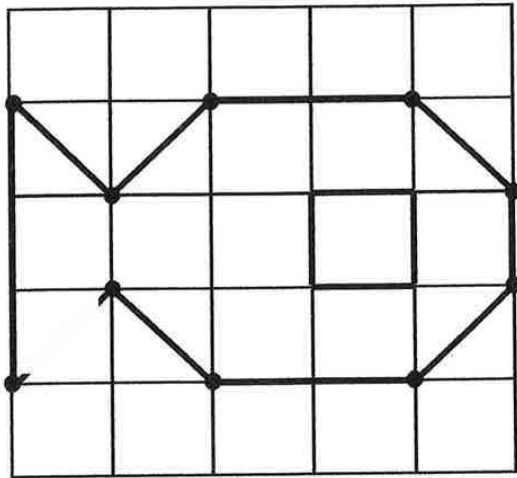
$1 + 6 = 7$

$1 + 5 = 6$

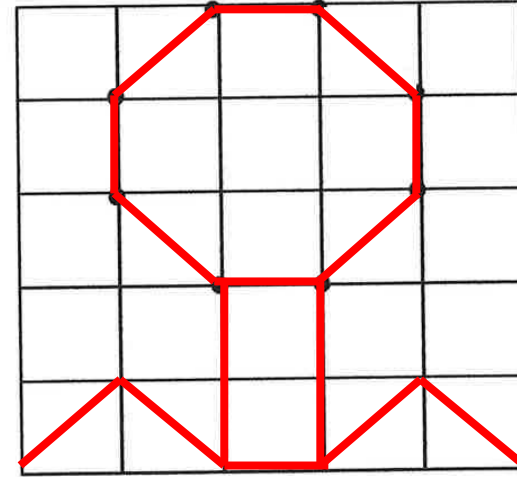

$2 + 5 = 7$

$1 + 2 = 3$

1 Reproduis les dessins. Ajoute les points qui manquent.



2



3

