

Exercice 1 : Calcule.

$1 + 10 = \dots\dots\dots$

$2 + 0 = \dots\dots\dots$

$2 + 10 = \dots\dots\dots$

$1 + 1 = \dots\dots\dots$

$1 + 0 = \dots\dots\dots$

$2 + 1 = \dots\dots\dots$

$1 + 3 = \dots\dots\dots$

$2 + 3 = \dots\dots\dots$

$1 + 9 = \dots\dots\dots$

$1 + 8 = \dots\dots\dots$

$2 + 9 = \dots\dots\dots$

$1 + 4 = \dots\dots\dots$

$2 + 8 = \dots\dots\dots$

$2 + 4 = \dots\dots\dots$

$1 + 7 = \dots\dots\dots$

$1 + 3 = \dots\dots\dots$

$2 + 7 = \dots\dots\dots$

$2 + 6 = \dots\dots\dots$

$1 + 6 = \dots\dots\dots$


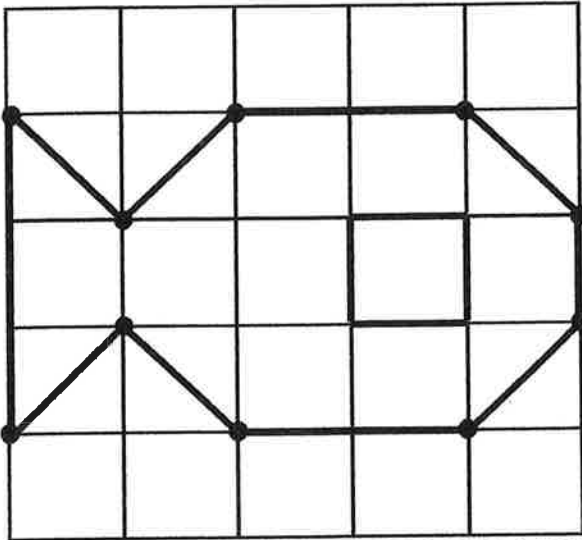
$1 + 5 = \dots\dots\dots$

$2 + 5 = \dots\dots\dots$


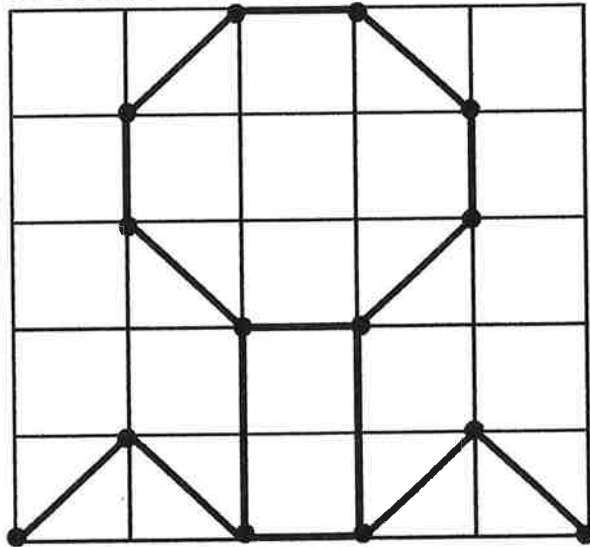
$1 + 2 = \dots\dots\dots$



1 Reproduis les dessins. Ajoute les points qui manquent.



2



3

